





DENKLEMİN EĞİMİNİ BULMA ETKİNLİĞİ


Verilen denklemlerin eğimini bularak tabloda cevaba karşılık gelen harfe yanındaki karalamayı yapınız


A	C	C	C	J	E	K	C	C	C	C	C	C
A	A	J	E	E	E	E	D	I	I	I	I	I
A	J	P	P	P	P	P	P	D	F	F	F	F
J	R		R		R	R	R	R	D	N	N	N
G	G	G	G	G	G	G	E	E	E	A	A	A
E	E	O	E	H	E	P	P	P	P	C	C	C
R	R	R	G	G	G	E	E	E	E	D	J	K
P	P	P	C	J	R	R	R	R	R	R	E	D
P	P	P	J	G	G	G	G	G	G	G	E	D
B	R	R	R	R	E	E	E	E	E	E	K	N
I	B	E	E	E	E	P	P	P	E	E	N	N
I	I	B	G	G	G	P	P	P	E	M	N	N
I	I	I	I	I	S	A	S	C	C	C	C	C


A	3	J	-5
B	5/3	K	1
C	3/5	L	-1
D	5	M	1/4
E	-5/3	N	6
F	3/2	O	2
G	2/7	P	7/2
H	-2/7	R	-2
I	-3/8	S	-3/2


1)  $5x+y-20=0$


2)  $2x+7y=0$


3)  $5x+12=y$


4)  $9x+6y+5=0$


5)  $2y=6x+15$


6)  $2y-3x-18=0$


7)  $5y=10x-9$


8)  $y = \frac{3x}{5} + \frac{7}{5}$


9)  $2x-8y+13=0$

10)  $3x+8y+20=0$

11)  $y=6x+19$

12)  $3x=3y+9$

13)  $x+y=10$

14)  $\frac{x}{3} - \frac{y}{5} = 1$

ALİYE SARIBAŞ

